

## SHOCK ABSORBERS

### Four parameters are required to precisely determine the dimension of shock absorbers

- Mass to be decelerated  $m$  (kg)
- Impact velocity  $v$  (m/s)
- Propelling or driving force  $F$  (N)
- Number of impact cycles per hour  $C$  (/hr)

### Some useful calculation formulas

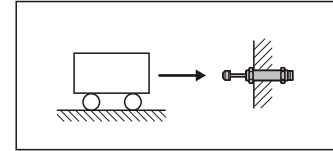
- Kinetic energy:  $E_k = mv^2/2$
- Drive energy:  $E_d = F \cdot S$
- Free fall velocity:  $v = \sqrt{2g \cdot h}$
- Pneumatic or hydraulic cylinder driving forces:  
 $F = 0.00785 Pd^2$
- Maximum shock force (approximate):  
 $F_m = 1.2 E_T/S$
- Propelling force generated by electric motors:  
 $F = 3000 \text{ kW}/v$
- Total energy absorbed per hour:  
 $E_{TC} = E_T \cdot C$

Symbols	Unit	Description
$\mu$		Coefficient of friction
$\alpha$	(rad)	Angle of incline
$\theta$	(rad)	Side load angle
$\omega$	(rad/s)	Angular velocity
$A$	(m)	Width
$B$	(m)	Thickness
$C$	(/hr)	Impact cycles per hour
$d$	(mm)	Cylinder bore diameter
$E_d$	(Nm)	Drive energy per cycle
$E_k$	(Nm)	Kinetic energy per cycle
$E_T$	(Nm)	Total energy per cycle
$E_{TC}$	(Nm)	Total energy per hour
$F$	(N)	Propelling force
$F_m$	(N)	Maximum shock force
$g$	(m/s <sup>2</sup> )	Acceleration due to gravity (9.81 m/s <sup>2</sup> )
$h$	(m)	Height
$HM$		Arresting torque factor for motors (normally 2.5)
$kW$	(kW)	Electric motor power
$m$	(kg)	Mass to be decelerated
$M_e$	(kg)	Effective mass
$P$	(bar)	Operation pressure
$R$	(m)	Radius
$R_s$	(m)	Shock absorber mounting distance from rotation center
$S$	(m)	Stroke
$T$	(Nm)	Driving torque
$t$	(s)	Deceleration time
$v$	(m/s)	Velocity of impact mass
$v_s$	(m/s)	Impact velocity at shock absorber

### Example 1: Horizontal impact

#### Application data

$m = 300 \text{ kg}$   
 $v = 1.0 \text{ m/s}$   
 $S = 0.05 \text{ m}$   
 $C = 300 \text{ /hr}$



#### Formulas and calculation

$$E_k = \frac{mv^2}{2} = \frac{300 \cdot 1.0^2}{2} = 150 \text{ Nm}$$

$$E_T = E_k = 150 \text{ Nm}$$

$$E_{TC} = E_T \cdot C = 150 \cdot 300 = 45000 \text{ Nm/hr}$$

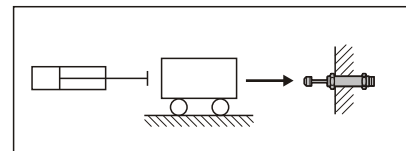
$$M_e = \frac{2E_T}{v^2} = \frac{2 \cdot 150}{1.0^2} = 300 \text{ kg}$$

Choose from sizing diagram: MDFC-3650 is adequate.

### Example 2: Horizontal impact with propelling force

#### Application data

$m = 50 \text{ kg}$   
 $v = 1.0 \text{ m/s}$   
 $S = 0.04 \text{ m}$   
 $F = 1000 \text{ N}$   
 $C = 500 \text{ /hr}$



#### Formulas and calculation

$$E_k = \frac{mv^2}{2} = \frac{50 \cdot 1.0^2}{2} = 25 \text{ Nm}$$

$$E_d = F \cdot S = 1000 \cdot 0.04 = 40 \text{ Nm}$$

$$E_T = E_k + E_d = 25 + 40 = 65 \text{ Nm}$$

$$E_{TC} = E_T \cdot C = 65 \cdot 500 = 32500 \text{ Nm/hr}$$

$$M_e = \frac{2E_T}{v^2} = \frac{2 \cdot 65}{1.0^2} = 130 \text{ kg}$$

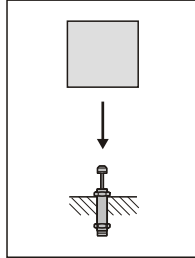
Choose from sizing diagram: MDFC-2540 is adequate.

## SHOCK ABSORBERS

### Example 3: Free fall impact

#### Application data

$m = 30\text{kg}$   
 $h = 0.5\text{m}$   
 $S = 0.08\text{m}$   
 $C = 300/\text{hr}$



#### Formulas and calculation

$$v = \sqrt{2g \cdot h} = \sqrt{2 \cdot 9.81 \cdot 0.5} = 3.1 \text{ m/sec}$$

$$E_k = mg \cdot h = 30 \cdot 9.81 \cdot 0.5 = 147 \text{ Nm}$$

$$E_d = mg \cdot s = 30 \cdot 9.81 \cdot 0.08 = 23.5 \text{ Nm}$$

$$E_T = E_k + E_d = 147 + 23.5 = 170.5 \text{ Nm}$$

$$E_{TC} = E_T \cdot C = 170.5 \cdot 300 = 51150 \text{ Nm/hr}$$

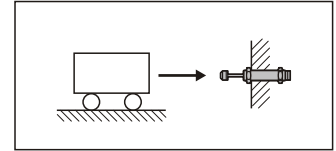
$$M_e = \frac{2E_T}{V^2} = \frac{2 \cdot 170.5}{3.1^2} = 35.5 \text{ kg}$$

Choose from sizing diagram: MDSC-2580-1 is adequate.

### Example 5: Horizontal impact with motor driving

#### Application data

$m = 50 \text{ kg}$   
 $v = 1.5 \text{ m/s}$   
 $\text{kW} = 2 \text{ kW}$   
 $\text{HM} = 2.5$   
 $S = 0.06 \text{ m}$   
 $C = 100 / \text{hr}$



#### Formulas and calculation

$$E_k = \frac{mv^2}{2} = \frac{50 \cdot 1.5^2}{2} = 56.25 \text{ Nm}$$

$$E_d = F \cdot S = \frac{\text{kW} \cdot \text{HM}}{v} \cdot S = \frac{2000 \cdot 2.5}{1.5} \cdot 0.06 = 200 \text{ Nm}$$

$$E_T = E_k + E_d = 56.25 + 200 = 256.25 \text{ Nm}$$

$$E_{TC} = E_T \cdot C = 256.25 \cdot 100 = 25625 \text{ Nm/hr}$$

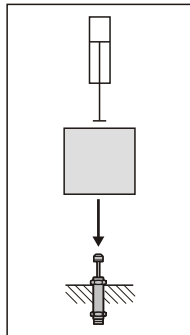
$$M_e = \frac{2E_T}{V^2} = \frac{2 \cdot 256.25}{1.5^2} = 227 \text{ kg}$$

Choose from sizing diagram: MDSC-3660-2 is adequate.

### Example 4: Free fall impact with propelling

#### Application data

$m = 40 \text{ kg}$   
 $h = 0.3 \text{ m}$   
 $S = 0.025 \text{ m}$   
 $P = 5 \text{ bar}$   
 $d = 50 \text{ mm}$   
 $C = 200 / \text{hr}$   
 $v = 1.0 \text{ m/sec}$



#### Formulas and calculation

$$E_k = \frac{mv^2}{2} = \frac{40 \cdot 1.0^2}{2} = 20 \text{ Nm}$$

$$E_d = F \cdot S = (mg + 0.0785Pd^2) \cdot S = (40 \cdot 9.81 + 0.0785 \cdot 5 \cdot 50^2) \cdot 0.025 = 34.3 \text{ Nm}$$

$$E_T = E_k + E_d = 20 + 34.3 = 54.3 \text{ Nm}$$

$$E_{TC} = E_T \cdot C = 54.3 \cdot 200 = 10860 \text{ Nm/hr}$$

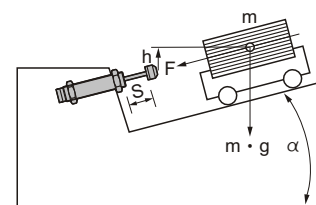
$$M_e = \frac{2E_T}{V^2} = \frac{2 \cdot 54.3}{1.0^2} = 108.6 \text{ kg}$$

Choose from sizing diagram: MDSC-2525 is adequate.

### Example 6: Inclined impact

#### Application data

$m = 30 \text{ kg}$   
 $h = 0.25 \text{ m}$   
 $S = 0.04 \text{ m}$   
 $\alpha = 30^\circ$   
 $C = 250 / \text{hr}$



#### Formulas and calculation

$$v = \sqrt{2g \cdot h} = \sqrt{2 \cdot 9.81 \cdot 0.25} = 2.2 \text{ m/sec}$$

$$E_k = \frac{mv^2}{2} = \frac{30 \cdot 2.2^2}{2} = 72.6 \text{ Nm}$$

$$E_d = F \cdot S = m \cdot g \cdot S \cdot \sin \alpha = 30 \cdot 9.81 \cdot 0.04 \cdot \sin 30^\circ = 5.9 \text{ Nm}$$

$$E_T = E_k + E_d = 72.6 + 5.9 = 78.5 \text{ Nm}$$

$$E_{TC} = E_T \cdot C = 78.5 \cdot 250 = 19625 \text{ Nm/hr}$$

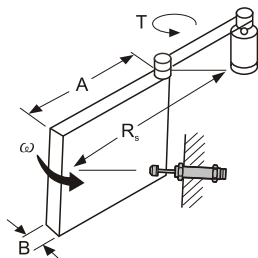
$$M_e = \frac{2E_T}{V^2} = \frac{2 \cdot 78.5}{2.2^2} = 32 \text{ kg}$$

Choose from sizing diagram: MDSC-2540-1 is adequate.

### Example 7: Horizontal rotating door

#### Application data

$m = 20 \text{ kg}$   
 $\omega = 2.0 \text{ rad/s}$   
 $T = 20 \text{ Nm}$   
 $R_s = 0.8 \text{ m}$   
 $A = 1.0 \text{ m}$   
 $B = 0.05 \text{ m}$   
 $S = 0.016 \text{ m}$   
 $C = 100 \text{ /hr}$



#### Formulas and calculation

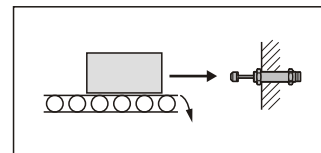
$I$	$= \frac{m(4A^2+B^2)}{12}$	$= \frac{20(4 \cdot 1.0^2+0.05^2)}{12}$	$= 6.67 \text{ kg} \cdot \text{m}^2$
$E_k$	$= \frac{I\omega^2}{2}$	$= \frac{6.67 \cdot 2.0^2}{2}$	$= 13.34 \text{ Nm}$
$\theta$	$= \frac{s}{R_s}$	$= \frac{0.04}{0.8}$	$= 0.05 \text{ rad}$
$E_D$	$= T \cdot \theta$	$= 20 \cdot 0.05$	$= 1.0 \text{ Nm}$
$E_T$	$= E_k + E_D$	$= 13.34 + 1.0$	$= 14.34 \text{ Nm}$
$E_{TC}$	$= E_T \cdot C$	$= 14.34 \cdot 100$	$= 1434 \text{ Nm/hr}$
$v$	$= \omega \cdot R_s$	$= 2.0 \cdot 0.8$	$= 1.6 \text{ m/s}$
$M_e$	$= \frac{2E_T}{V^2}$	$= \frac{2 \cdot 14.34}{1.6^2}$	$= 11.20 \text{ kg}$

Choose from sizing diagram: MDFC-2016 is adequate.

### Example 9: Horizontal mass on driven rollers

#### Application data

$m = 150 \text{ kg}$   
 $v = 0.5 \text{ m/s}$   
 $\mu = 0.25$   
 $S = 0.02 \text{ m}$   
 $C = 120 \text{ /hr}$



#### Formulas and calculation

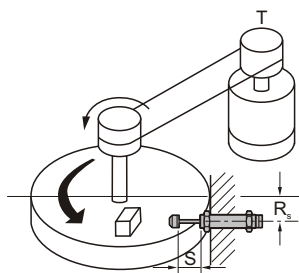
$E_k$	$= \frac{mv^2}{2}$	$= \frac{150 \cdot 0.5^2}{2}$	$= 18.75 \text{ Nm}$
$E_D$	$= F \cdot S = mg \mu \cdot S$	$= 150 \cdot 9.81 \cdot 0.25 \cdot 0.02$	$= 7.35 \text{ Nm}$
$E_T$	$= E_k + E_D$	$= 18.73 + 7.35$	$= 26.1 \text{ Nm}$
$E_{TC}$	$= E_T \cdot C$	$= 26.1 \cdot 120$	$= 3132 \text{ Nm/hr}$
$M_e$	$= \frac{2E_T}{V^2}$	$= \frac{2 \cdot 26.1}{0.5^2}$	$= 208.8 \text{ kg}$

Choose from sizing diagram: MDSC-2020-3 is adequate.

### Example 8: Rotary index table with propelling force

#### Application data

$m = 200 \text{ kg}$   
 $\omega = 1.0 \text{ rad/s}$   
 $T = 100 \text{ Nm}$   
 $R = 0.5 \text{ m}$   
 $R_s = 0.4 \text{ m}$   
 $S = 0.04 \text{ m}$   
 $C = 100 \text{ /hr}$



#### Formulas and calculation

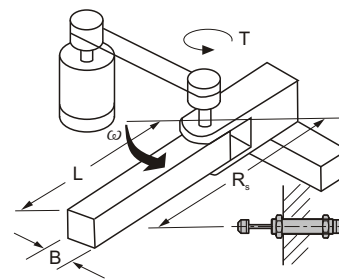
$I$	$= \frac{mR^2}{2}$	$= \frac{200 \cdot 0.5^2}{2}$	$= 25 \text{ kg} \cdot \text{m}^2$
$E_k$	$= \frac{I\omega^2}{2}$	$= \frac{25 \cdot 1.0^2}{2}$	$= 12.5 \text{ Nm}$
$\theta$	$= \frac{s}{R_s}$	$= \frac{0.04}{0.4}$	$= 0.1 \text{ rad}$
$E_D$	$= T \cdot \theta$	$= 100 \cdot 0.1$	$= 10 \text{ Nm}$
$E_T$	$= E_k + E_D$	$= 12.5 + 10$	$= 22.5 \text{ Nm}$
$E_{TC}$	$= E_T \cdot C$	$= 22.5 \cdot 50$	$= 1125 \text{ Nm/hr}$
$v$	$= \omega \cdot R_s$	$= 1.0 \cdot 0.4$	$= 0.4 \text{ m/s}$
$M_e$	$= \frac{2E_T}{V^2}$	$= \frac{2 \cdot 22.5}{0.4^2}$	$= 281 \text{ kg}$

Choose from sizing diagram: MDFC-2540 is adequate.

### Example 10: Rotating beam with driving force

#### Application data

$m = 40 \text{ kg}$   
 $A = 0.5 \text{ m}$   
 $B = 0.05 \text{ m}$   
 $\omega = 2.0 \text{ rad/s}$   
 $T = 10 \text{ Nm}$   
 $R_s = 0.4 \text{ m}$   
 $S = 0.05 \text{ m}$   
 $C = 50 \text{ /hr}$



#### Formulas and calculation

$I$	$= \frac{m(4A^2+B^2)}{12}$	$= \frac{40(4 \cdot 0.5^2+0.05^2)}{12}$	$= 3.34 \text{ kg} \cdot \text{m}^2$
$E_k$	$= \frac{I\omega^2}{2}$	$= \frac{3.34 \cdot 2.0^2}{2}$	$= 6.7 \text{ Nm}$
$\theta$	$= \frac{s}{R_s}$	$= \frac{0.05}{0.4}$	$= 0.125 \text{ rad}$
$E_D$	$= T \cdot \theta$	$= 10 \cdot 0.125$	$= 1.25 \text{ Nm}$
$E_T$	$= E_k + E_D$	$= 6.7 + 1.25$	$= 8 \text{ Nm}$
$E_{TC}$	$= E_T \cdot C$	$= 8 \cdot 50$	$= 400 \text{ Nm/hr}$
$v$	$= \omega \cdot R_s$	$= 2.0 \cdot 0.4$	$= 0.8 \text{ m/s}$
$M_e$	$= \frac{2E_T}{V^2}$	$= \frac{2 \cdot 8}{0.8^2}$	$= 25 \text{ kg}$

Choose from sizing diagram: MDFC-2050 is adequate.